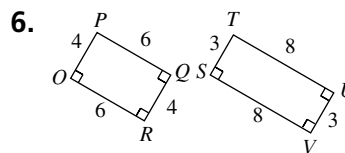
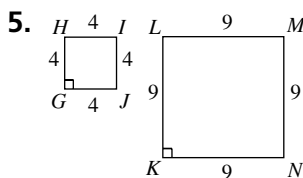
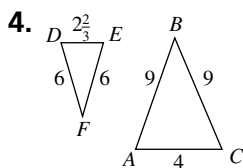
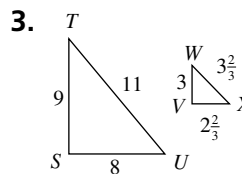
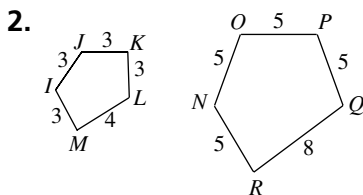
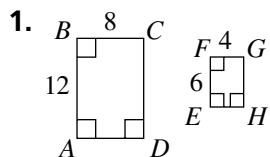


Skill: Similarity and Ratios

Investigation 4

Stretching and Shrinking

Tell whether each pair of polygons is similar. Explain why or why not.



Exercise 7–11 show pairs of similar polygons. Find the missing side lengths.

