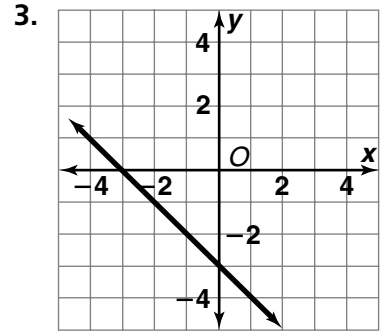
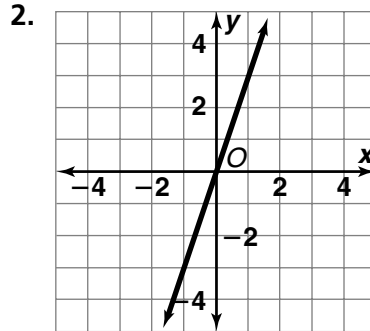
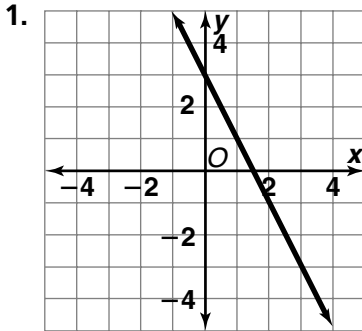


Skill: Writing Equations

Investigation 4

Moving Straight Ahead

Write an equation for each line.



Use the graph at the right for Exercises 4–8.

4. What earnings will produce \$225 in savings?

5. How much is saved from earnings of \$400?

6. What is the slope of the line in the graph?

7. For each increase of \$200 in earnings, what is the increase in savings?

8. Write an equation for the line.

