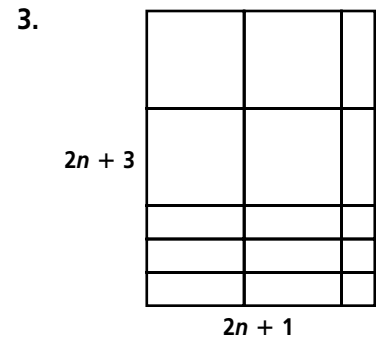
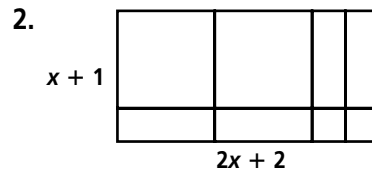
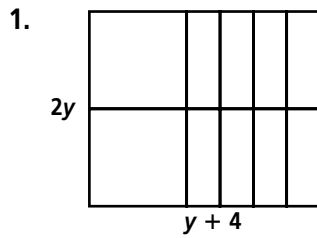


Skill: Writing Expressions in Expanded Form

Investigation 2

Frogs, Fleas, and Painted Cubes

Find the area of each rectangle.



Use the Distributive Property to write each expression in expanded form.

4. $x(x+2)$

5. $3b(b-5)$

6. $2x^2(x+9)$

7. $2(a^2+8a+1)$

8. $2x^2(4x+1)$

9. $3l(l^2+4l-6)$

10. $(x+2)(x+3)$

11. $(x+5)(x+1)$

12. $(x+4)(x+5)$

13. $(x+7)(x+2)$

14. $(x+1)(x-6)$

15. $(x+8)(x-3)$