

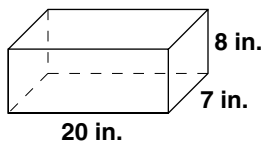
Skill: Volume of a Box

Investigation 2

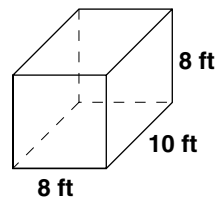
Filling and Wrapping

Find the volume of each closed box.

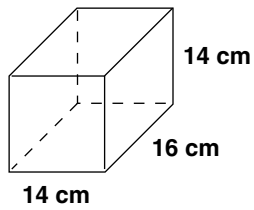
1.



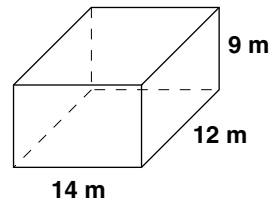
2.



3.



4.



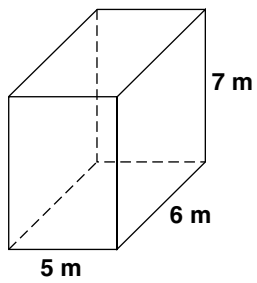
Skill: Volume of a Box *(continued)*

Investigation 2

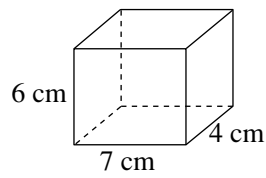
Filling and Wrapping

Find the volume of each closed box.

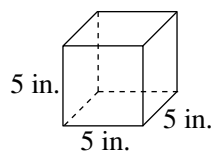
5.



6.



7.



8.

