

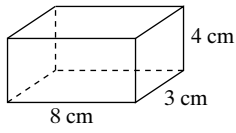
Skill: Surface Area of a Box

Investigation 2

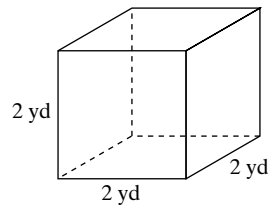
Filling and Wrapping

Draw a net for each prism.

1.

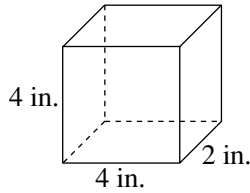


2.

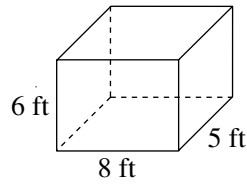


Find the surface area of each figure to the nearest whole unit.

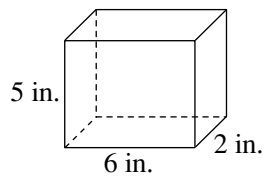
3.



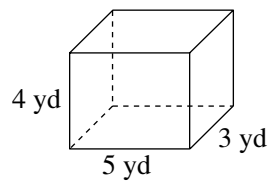
4.



5.



6.



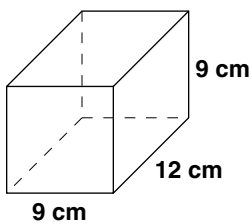
Skill: Surface Area of a Box *(continued)*

Investigation 2

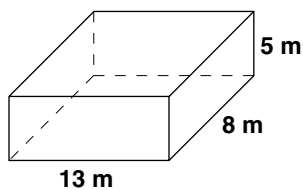
Filling and Wrapping

Find the surface area of each prism.

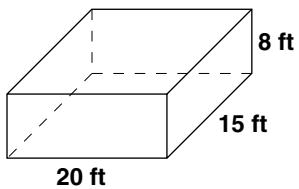
7.



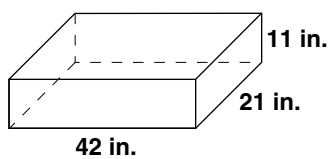
8.



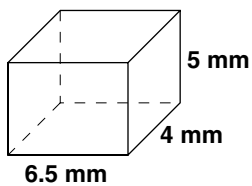
9.



10.



11.



12.

