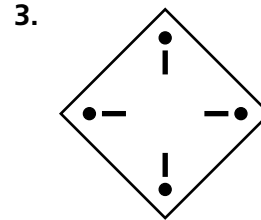
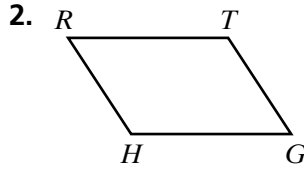
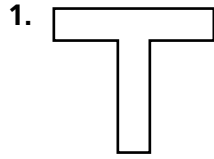


Skill: Identifying Rotation Symmetry

Investigation 1

Kaleidoscopes, Hubcaps, and Mirrors

Judging from appearances, does each figure have rotational symmetry? If yes, what is the angle of rotation?



Determine if each figure could be a rotation of the figure at the right. For each figure that could be a rotation, tell what the angle of rotation appears to be.

