

# Skill: Identifying Reflection Symmetry

## Investigation 1

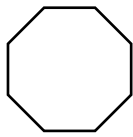
### Kaleidoscopes, Hubcaps, and Mirrors

How many lines of symmetry can you find for each letter?

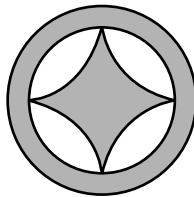
1. W                      2. X                      3. H                      4. T

Draw all the lines of symmetry for each figure.

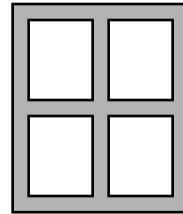
5.



6.

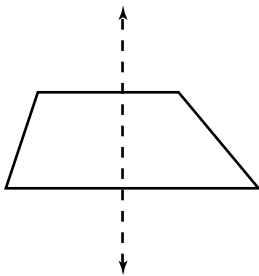


7.

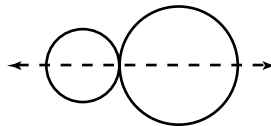


Is the dashed line a line of symmetry? Write yes or no.

8.



9.



10.

